

PLACID VIDYA VIHAR SR. SEC. SCHOOL
CHETHIPUZHA

SUMMATIVE ASSESSMENT - II - 2015-'16

STD: III

Time: 1 hr.

ENGLISH

Max. Marks: 50

SECTION A - READING (10)

I. Read the following passage and answer the questions given below:-

Once upon a time, there was a tailor who lived in a village. An elephant also lived in the same village. The elephant visited the tailor's shop every day and the tailor gave him fruits and vegetables to eat. They were very good friends. One day the tailor was in a bad mood and pricked the elephant's trunk with a needle when he came to visit him. Wanting to teach the tailor a lesson, the elephant went to the river and filled his trunk with muddy water. He went back to the shop and emptied his trunk over the tailor and his shop. The tailor realized his mistake. He offered him a banana and the two became friends again.

I. Say whether the following statements are true or false. (2)

- a. The elephant visited the tailor's shop once in a week.
- b. The tailor gave the elephant fruits and vegetables.
- c. The elephant wanted to teach the tailor a lesson.
- d. The tailor did not realize his mistakes.

II. Complete the given sentences choosing the right answer from the bracket. (1½)

- a. The elephant and the tailor lived in the _____ village. (same, different)
- b. The tailor pricked the elephant's _____ with a needle. (trunk, tail)
- c. The elephant went to the river and filled his trunk with _____ water. (clear, muddy)

III. Answer the following. (1½)

- a. How did the tailor and the elephant become friends again?

IV. Read the following poem and answer the questions given below:-

Isabel met an ¹enormous bear
Isabel, Isabel, didn't care
The bear was hungry, the bear
was very hungry
The bear's big mouth was cruel and large
The bear said, Isabel, glad to meet you
Isabel, now I'll eat you!
Isabel, Isabel, didn't worry
Isabel didn't scream or ²scurry
She washed her hands and she
straightened her hair up
Then Isabel quietly ate the bear up!

Meanings :-

enormous - very big

scurry - run with short quick steps

III. Answer the following.

- a. What did the bear say to Isabel?

- b. Mention two things Isabel did when she heard that the bear was going to eat her up? 2
- c. Give a suitable title to the poem. 1

SECTION B - WRITING (10)

- _IV. a. Write a paragraph on 'Gandhiji'. (5)**
- b. Imagine that you have seen a dinosaur on the way to school. Write a letter to your cousin explaining the experience. (5)**

SECTION C - GRAMMAR (15)

- V. Complete the following sentences using suitable articles. (3)**

(a, an, the)

- a. Manu ate ¹ idli and ² omlette for breakfast. Surya bought ³ scarf, ⁴ umbrella and ⁵ pair of binoculars. But later she lost ⁶ umbrella.

- VI. Complete the following sentences choosing the right words from the bracket. (2)**

(soon, everywhere, slowly, quickly)

- a. It is early morning. The sun came out of the sky. Beautiful flowers bloomed Amy finished her home work Amy has to go to school

- VII. Pick out the correct pronoun to complete the sentence. (1)**

- a. This is my teacher. _____ (she, it) is kind.
- b. Read a story to _____ (us, we)

- VIII. Complete the sentences using the most suitable preposition. (2)**

- a. The desk is _____ (near, in) the bed.
- b. The dust bin is _____ (between, under) the desk.
- c. The frog jumped _____ (into, between) the pond.
- d. The book is _____ (in, into) the bag.

- IX. Rewrite the sentences using the given conjunctions. (3)**

(because, or, and)

- a. Do you want bread? Do you want rice?
- b. I opened my bag. I took out a book.
- c. We cannot play cricket. It is raining outside.

- X. Write questions for these answers using the given words to begin your sentences. (3)**

- a. Where _____ ?
I live in Ahmedabad.
- b. How _____ ?
I came to school by bus.
- c. When _____ ?
My birthday is on 24 November.

- XI. Complete the sentences with 'There is' or 'There are'. (1)**

- a. _____ some books on my desk.
- b. _____ a dustbin under the desk.

SECTION D - LITERATURE (15)

XII. Mix and Match.

(3)

- | | |
|--------------------|--------------------------------|
| a. realize | - make great efforts to free |
| b. twitched | - become aware of the fact |
| c. melt | - a village near the sea coast |
| d. struggle | - moved a little |
| e. coastal village | - look quickly or secretly |
| f. peep | - become liquid by heating |

XIII. Make sentences using any two of the following.

(2)

- a. realized
- b. city council
- c. holiday
- d. salt law

XIV. Say True or False.

(2)

- a. Birbal, the cleverest of Akbar's ministers gave Akbar good medicines.
- b. The sun was happy to see that life on earth has come to a stop in his absence.
- c. Some patted the dinosaur and said 'Your name is Clarence'.
- d. Gandhiji decided to break the salt law.

XV. Answer the following. 2 marks each.

(8)

- a. Why did clarence like living in school?
- b. What happened to the following when Mr. Sun decided to shine?
 - 1. The water in the lake
 - 2. Pigeon
- c. Write any two sentences on 'Akbar the great'.
- d. What do you know of Gandhiji's salt satyagraha?

PLACID VIDYA VIHAR SR. SEC. SCHOOL
CHETHIPUZHA

SUMMATIVE ASSESSMENT - II - 2015-'16

STD: III

Time: 1 hr.

Max. Marks: 50

BASIC SCIENCE

I. Qns. 1-7. Fill in the blanks with suitable answer from the bracket. $\frac{1}{2}$ mark each. (3 $\frac{1}{2}$)

1. The Earth rotates from west to _____. (west, east)
2. Do not use _____ bags. (paper, plastic)
3. The time taken by moon to complete one rotation is _____ days. (,)
4. Movement of the Earth around the sun is called _____. (rotation, revolution)
5. An adult heart beats about 72 to _____ times in a minute. (90, 80)
6. We breathe in _____ through the nose.
(carbon dioxide, oxygen)
7. The Earth is a part of the _____ system. (lunar, solar)

II. Qns. 8-13. Match the following. $\frac{1}{2}$ mark each. (3)

- | | |
|---------------------|---------------------------------------|
| 8. Space rocket | - 24 hours |
| 9. Neil Armstrong | - 365 $\frac{1}{4}$ days |
| 10. Kalpana Chawla | - First man on moon |
| 11. Rotation | - Jantar Mantar |
| 12. Sawai Jai Singh | - First Indian woman to go into space |
| 13. Revolution | - Space craft |

III. Qns. 14-18. Write True or False. $\frac{1}{2}$ mark each. (2 $\frac{1}{2}$)

14. Planets and moon have their own light.
15. Kalpana Chawla died on 1st February 2003.
16. Crackers burnt on festivals pollute water.
17. If a person weighs 60 kg on Earth, he would weigh 10 kg on the Moon.
18. Sense organs send messages to the brain.

IV. Qns. 19-25. Fill in the blanks. 1 mark each. (7)

19. The _____ is called the Farmer's friend.
20. _____ is the biggest planet in the Solar system.
21. Loam is a mixture of sand and _____.
22. The _____ is covered with huge potholes called craters.
23. The _____ controls all actions of the body.
24. The _____ is the nearest star to the Earth.
25. If the person is bleeding clean the wound with _____.

- V. Qns. 26-30. Name the following. 1 mark each. (5)**
26. The first human to go into space.
 27. The eight planets in the solar system.
 28. The four kinds of pollution.
 29. Two Indian Astronomers.
 30. The attractive force of the Earth.
- VI. Qns. 31-40. Answer the following. 2 marks each. (20)**
31. What is digestion?
 32. What do you know about Aryabhata?
 33. What is soil made up of?
 34. Why do we need space rockets to go into space?
 35. How is noise harmful to us?
 36. What are the functions of the skeletal system?
 37. How can we protect our environment?
 38. Why is noon the hottest time of the day?
 39. What is rotation?
 40. Why do doors and windows have wire nettings?
- VII. Qns. 41 & 42. Answer the following. 3 marks each. (6)**
41. How do rocks change to soil?
 42. Explain any one method to prove that the Earth is round in shape.
- VIII. Qn. 43. Draw the different phases of Moon and name them. (3)**

PLACID VIDYA VIHAR SR. SEC. SCHOOL

CHETHIPUZHA

SUMMATIVE ASSESSMENT - II - 2015-'16

STD: III Time: 1 hr.

Max. Marks: 50

SOCIAL SCIENCE

I. Complete the following statements choosing the correct answer from the brackets.

($\frac{1}{2} \times 8 = 4$)

1. Chennai is the _____ largest city in India.
(fourth, fifth, sixth)
2. We should always use the _____ to cross the road.
(footpath, zebra crossing, level crossing)
3. A _____ is a long woollen kurta worn by kashmiri men and women.
(Phiran, Salwar Kameez, Pavadai)
4. The Gram Panchayat is also called _____.
(Gram Sabha, Panchayat Samiti, Zila Parishad)
5. An important means of communication today is the _____.
(radio, telephone, computer)
6. The first metals discovered by early humans were _____.
(bronze and mica, iron and copper, iron and bronze)
7. _____ is a national festival.
(Christmas, Republic day, Eid)
8. In Tamil Nadu the lungi is called _____.
(mundu, dhoti, veshti)

II. Fill in the blanks.

($1 \times 7 = 7$)

9. Early humans used _____ to help them in their work.
10. We can send an e-mail through a _____.
11. Dussehra is also called _____.
12. The _____ of a place determines the type of clothes people wear.
13. The _____ is known as the 'king of fruits'.
14. The Chief Minister of Kerala is _____.
15. Coconuts grow in _____ areas.

III. State whether the following statements are 'true' or 'false'.

($\frac{1}{2} \times 5 = 2\frac{1}{2}$)

16. The head of the Gram Panchayat is called the Panch.
17. Spices add flavour and colour to our food.
18. People generally eat wheat in the northern states.
19. The climate is same near the sea coast throughout the year.
20. Holi is the festival of lights.

IV. Match the following.

($\frac{1}{2} \times 5 = 2\frac{1}{2}$)

- | | |
|---------------------|-------------------|
| 21. Durga Puja | - Summer season |
| 22. Basant Panchami | - West Bengal |
| 23. Diwali | - Goutam Buddha |
| 24. Gurupurb | - Spring season |
| 25. Buddha Purnima | - Goddess Lakshmi |
| | - Sikh Guru |

V. Answer the following questions in a word or a sentence.

(1×6=6)

26. When is Teacher's Day celebrated?
27. What do veterinary doctors do?
28. Why is VGP Golden Beach very popular with children?
29. What is an occupation?
30. Why did Early humans move from one place to another?
31. What is the full form of SMS?

VI. Answer the following questions briefly.

(2×8=16)

32. Who chooses the members of the Gram Panchayat?
33. What is a fax used for?
34. Whom do we remember on Independence Day?
35. What did Early humans fear?
36. Why do we need money?
37. How does a policeman help us?
38. What is an e-mail?
39. How do we choose a particular means of transport?

VII. Answer the following.

(3×4=12)

40. How did Early humans learn to make fire?
41. Write five rules of road safety.
42. How do satellites play an important role in communication?
43. Why do people wear different types of clothes in different parts of our country?

PLACID VIDYA VIHAR SR. SEC. SCHOOL

CHETHIPUZHA

SUMMATIVE ASSESSMENT - II - 2015-'16

STD: III

Time: 1 hr.

Max. Marks: 50

MATHEMATICS

I. Qns. 1 - 8 carry 1 mark each.

[8×1=8]


Fill in the blanks.

1. ₹18.50 = _____ paise.
2. 60 kg 75 g = _____ gram
3. Representing data using pictures is called _____ .
4. 6 times 7 is _____
5. $45 \div \underline{\hspace{1cm}} = 1$.
6. $175 - 75 = \underline{\hspace{1cm}}$
7. 9 chairs will have _____ legs.
8. The shortest month of the year is _____ .


II. Qns. 9 - 14 carry 2 marks each.

[6×2=12]

9. Write the time shown.

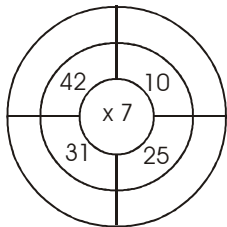


a)



b)

10. Complete the following multiplication wheel.



11. Anil had ₹59.75. He spent ₹25.95 on ice cream. How much money is left with him?
12. Each shelf has 15 toys. How many toys will be there in 8 shelves?

13. Fill in the with the correct operation (+, -, ÷, ×) to get the answer.

a) $20 \square 15 = 5$

b) $6 \square 7 = 42$

c) $32 \square 8 = 4$

d) $13 \square 3 = 16$

14. Divide.

a) $84 \div 6$

b) $75 \div 5$

III. Qns. 15 - 20 carry 3 marks each.

[6×3=18]

15. Multiply

a)
$$\begin{array}{r} 305 \\ \times 6 \\ \hline \\ \hline \end{array}$$

b)
$$\begin{array}{r} 61 \\ \times 35 \\ \hline \\ \hline \end{array}$$

c)
$$\begin{array}{r} \text{L} \quad \text{mL} \\ 3 \quad 223 \\ \times \quad 4 \\ \hline \end{array}$$

16. Match the following.

- a) 900×0 - 1
- b) $894 - 10$ - 78
- c) 50×4 - 60
- d) $60 \div 1$ - 200
- e) $78 - 0$ - 884
- f) $93 \div 93$ - 0

17. Observe the table given below and answer the questions.

Item	Price
Note Book	₹15.50
Pencil	₹7.00
Geometric Box	₹75.25
Drawing Book	₹45.00

- a) Ravi bought a Note Book and a Pencil. What is the total cost?
- b) Anu bought a Drawing Book and a Geometric Box. What is the total cost?

18. Find the sum.

- a) ₹148.85 + ₹61.35
- b) 55 kg 95 g + 17 kg 157 g
- c) 82 L 430 mL + 25 L 75 mL

19. Subtract.

- a) ₹600 - ₹275.90
- b) 832 - 489
- c) 765 - 216

20. a) Mother bought 2 L 250 mL of milk in the morning and 800 mL in the evening. How much milk does she buy in a day?

b) Divide by repeated subtraction.

$$56 \div 7$$

IV. Qns. 21 - 23 carry 4 marks each.

[3×4=12]

21. a) 49 sweets were distributed equally among 7 children. How many sweets did each child get?

b) Divide and write the quotient and remainder.

(i) $71 \div 4$

(ii) $84 \div 5$

22. Look at the calendar and answer the questions.

FEBRUARY 2016						
SUN	MON	TUE	WED	THU	FRI	SAT
1	2	3	4	5	6	7
8	9	10	11	12	13	14
15	16	17	18	19	20	21
22	23	24	25	26	27	28
29						

- a) Is the year 2016, a leap year?
- b) How many sundays are there in this month?
- c) Is 13th a second saturday?
- d) What is the date on the 4th Friday?

23. The following table shows the favourite fruit of the students of a class. Draw a pictograph to represent the data.

Name of fruits	Number of students
Apple	7
Orange	6
Mango	9
Grapes	5
Banana	3

PLACID VIDYA VIHAR SR. SEC. SCHOOL

CHETHIPUZHA

SUMMATIVE ASSESSMENT - II - 2015-'16

STD: III

Time: 1 hr.

Max. Marks: 50

MALAYALAM

I. ബ്രായ്ക്കറ്റിൽ നിന്നും ശരിയായ ഉത്തരം തിരഞ്ഞെടുത്ത് എഴുതുക.

1. ചുഴികളിൽ ചെഞ്ചായമിട്ടതാർ?
(കുരുവികൾ, സന്ധ്യ, ചീനവലകൾ)
2. “ആർക്കൊക്കെ ചിത്രം വരച്ചു പഠിക്കണം?” - ആരുടെ വാക്കുകളാണിത്?
(രാജാവിവർമ, രാജരാജവർമ, മാതാപിതാക്കൾ)
3. ‘കുട്ടിയും അമ്മയും’ എന്ന കവിത എഴുതിയതാർ?
(വയലാർ, ചെറുശ്ശേരി, കുമാരനാശാൻ)
4. ശരിയായ പദമേത്?
(പ്രശസ്തൻ, പ്രശസ്ഥൻ, പ്രശസ്ത്തൻ) (1/2×4=2)

II. അർത്ഥമെഴുതുക. 1/2 മാർക്കു വീതം.

5. പ്രിയം
6. പരിഭ്രമം
7. പരതുക
8. നികത്തുക (1/2×4=2)

III. വിപരീതപദമെഴുതുക. 1/2 മാർക്കു വീതം.

9. രഹസ്യം
10. പ്രഭാതം
11. മണ്ണ്
12. ശത്രു (1/2×4=2)

IV. പിരിച്ചെഴുതുക. 1/2 മാർക്കു വീതം.

13. കാറ്റടിച്ചില്ല
14. ജീവിയാണ്
15. അക്കാലത്ത് (1/2×3=1 1/2)

V. ചേർത്തെഴുതുക. 1/2 മാർക്കു വീതം.

16. നടന്ന് + എത്തുക
17. മാല + ആയി
18. കൊട്ടാരം + ഇൽ (1/2×3=1 1/2)

VI. ഒറ്റപ്പദമെഴുതുക. 1/2 മാർക്കു വീതം.

19. നെല്ലിന്റെ കതിരുകൾ
20. പാറയുടെ പുറം (1/2×2=1)

VII. എതിർലിംഗമെഴുതുക. 1/2 മാർക്കു വീതം.

21. അപ്പപ്പൻ
22. ഗുരുനാഥ
23. മണ്ടൻ
24. മാതാവ് (1/2×4=2)

VIII. അർത്ഥവ്യത്യാസം എഴുതുക. 1 മാർക്കു വീതം.

25. ഉൗഹം - ഉൗനം
26. മദിക്കുക - മതിക്കുക
27. ഫലം - ഫാലം (1×3=3)

IX. പര്യായപദമെഴുതുക. 1 മാർക്കു വീതം.

28. നക്ഷത്രം
29. ശിഖരം
30. മുറ്റം (1×3=3)

X. നാനാർത്ഥമെഴുതുക. 1 മാർക്കു വീതം.

31. സമയം
32. മാനം
33. വരം (1×3=3)

XI. മാതൃകപോലെ എഴുതുക. 1 മാർക്കു വീതം.

- മാതൃക : പറയാനേ സമയമുള്ളൂ.
പറയാൻ മാത്രമേ സമയമുള്ളൂ.
34. ലാളിക്കാനേ നേരമുള്ളൂ.
 35. പോകാനേ പറയുകയുള്ളൂ.
 36. കാണാനേ തരമുള്ളൂ. (1×3=3)

XII. വാക്യത്തിൽ പ്രയോഗിക്കുക. 1 മാർക്ക് വീതം.

- 37. അന്തം വിടുക
- 38. അഭിമാനം

(1×2=2)

XIII. ഒറ്റവാക്യത്തിൽ ഉത്തരമെഴുതുക. 1 മാർക്ക് വീതം.

- 39. ‘ആ രംഗം കാണാൻ വയ്യ’ - ഏതു രംഗം?
- 40. കുട്ടി പലകയിൽ വരച്ച ചിത്രം ആരുടേതായിരുന്നു?
- 41. കഴുകനെപ്പോലെ കാണപ്പെട്ടതെന്ത്?
- 42. മനുഷ്യൻ കാണിക്കുന്ന മണ്ടത്തരമെന്താണ്?
- 43. കണ്ണന്റെ വായിൽ മാതാവ് ക തെന്തെല്ലാം?

(1×5=5)

XIV. രണ്ടോ മൂന്നോ വാക്യത്തിൽ ഉത്തരമെഴുതുക. 2 മാർക്ക് വീതം.

- 44. മരക്കൊമ്പിലിരുന്നപ്പോൾ മണിയൻ പരുന്തിനോട് പറഞ്ഞതെന്തെല്ലാം?
- 45. അപ്പുപ്പൻമാവിന്റെ പ്രത്യേകതകൾ എന്തെല്ലാം?
- 46. “എന്തായാലും ഒരു ചെറിയ പരീക്ഷണം അതിൽ ജയിക്കുന്നവരെ മാത്രമേ പഠിപ്പിക്കുകയുള്ളൂ” - എന്തായിരുന്നു പരീക്ഷണം?
- 47. “നീ മണ്ണു തിന്നോ?” എന്ന മാതാവിന്റെ ചോദ്യത്തിന് കണ്ണന്റെ ഉത്തരം എന്തായിരുന്നു?
- 48. അപ്പുപ്പൻ മാവിനെ സംഗീത ഇഷ്ടപ്പെടാൻ കാരണമെന്ത്?
- 49. ‘ആ പ്രവചനം ഫലിച്ചു’ ഏതു പ്രവചനം?

(2×6=12)

XV. പാഠപുസ്തകത്തിലേതു പോലെ പൂരിപ്പിക്കുക. 3 മാർക്ക്

- 50. ഈ വല്ലിയിൽ
- ഭംഗി (6 വരി)

(3)

XVI. സൂചനയിൽ നിന്ന് കഥ വികസിപ്പിക്കുക. 4 മാർക്ക്

- 51. പണ്ട് ----- ആമയും മൂയലും ----- അവർ ----- കണ്ടുമുട്ടി ----- കളിയാക്കി -----
ഓട്ടമത്സരം ----- ആമ തയ്യാറാണ് ----- ഓട്ടം ----- മൂയൽ ഉറങ്ങി ----- ആമ ജയിച്ചു. (4)

PLACID VIDYA VIHAR SR. SEC. SCHOOL

Chethipuzha

SUMMATIVE ASSESSMENT - II - 2015-'16

STD: III

Time: 1 hr.

Max. Marks: 50

HINDI

I. नीचे दिए गए शब्दों के अर्थ अंग्रेज़ी में लिखो

[Write the meanings in English for the following words]

($\frac{1}{2} \times 5 = 2\frac{1}{2}$)

- | | | |
|-----------|-----------|------------|
| 1. अँधेरा | 2. हरषाते | 3. धन्यवाद |
| 4. दंग | 5. सूखा | |

II. नीचे दिए गए शब्दों के अर्थ हिन्दी में लिखो

[Write the meanings in Hindi for the following words]

($\frac{1}{2} \times 5 = 2\frac{1}{2}$)

- | | | |
|---------|-----------|---------|
| 6. ताज | 7. उतावले | 8. धरती |
| 9. आनंद | 10. ओर | |

III. विलोम शब्द लिखो (Write the opposites)

($\frac{1}{2} \times 5 = 2\frac{1}{2}$)

- | | | |
|------------|----------|----------|
| 11. ज़मीन | 12. शहर | 13. अंदर |
| 14. प्रश्न | 15. गरमी | |

IV. लिंग बदलो (Change the gender)

($\frac{1}{2} \times 5 = 2\frac{1}{2}$)

- | | | |
|--------------|------------|-------------|
| 16. महोदया | 17. गायिका | 18. सहपाठिन |
| 19. कवयित्री | 20. वृद्धा | |

V. बहुवचन रूप लिखो (Write the plurals)

($\frac{1}{2} \times 5 = 2\frac{1}{2}$)

- | | | |
|-----------|------------|----------|
| 21. बहन | 22. गौरैया | 23. सड़क |
| 24. बगीचा | 25. आँख | |

VI. अंकों को हिन्दी अक्षरों में लिखो (Write the number names in Hindi)

($\frac{1}{2} \times 6 = 3$)

- | | | |
|--------|--------|--------|
| 26. 20 | 27. 26 | 28. 30 |
| 29. 28 | 30. 25 | 31. 24 |

VII. जोड़े बनाओ (Match the following)

($\frac{1}{2} \times 6 = 3$)

- | | | |
|------------|---|-------|
| 32. नृत्य | - | आराम |
| 33. मेघ | - | खतम |
| 34. मौन | - | शीघ्र |
| 35. समाप्त | - | नाच |
| 36. चैन | - | बादल |
| 37. जल्दी | - | चुप |

VIII. कोष्ठक से सही शब्द चुनकर वाक्यों की पूर्ती करो

(Choose the correct word and fill in the blanks)

($\frac{1}{2} \times 6 = 3$)

(आगरा, गाँधीजी, हो, फैलाकर, कर्ता, पंख)

38. काम के करनेवाले को _____ कहते हैं।

39. अकबर की राजधानी का नाम _____ था।

40. हमारे राष्ट्रपिता _____ हैं।

41. चिड़िया ने _____ फडफड़ाए।

42. मोर पंख _____ नाचता है।

43. तुम कौन _____ ?

IX. उचित स्थान पर ' ' या ' ' लगाओ (Put ' ' or ' ' in the correct place)

($\frac{1}{2} \times 6 = 3$)

44. तुरत 45. मडराना 46. रग

47. मत्री 48. हस 49. आख

X. सही शब्द चुनकर लिखो (Choose and write the correct word)

($1 \times 3 = 3$)

50. घोंसला / गोंसला 51. राजदानी / राजधानी 52. मिढास / मिठास

XI. पूरा करो (Fill in the blanks)

($1 \times 3 = 3$)

53. चाँद सा 54. बरफ़ सा 55. मिसरी सी

XII. दिए गए अक्षरों से दो-दो शब्द बनाओ

(Make two words with the given letters)

($1 \times 4 = 4$)

56. ऋ - , 57. ज - ,

58. फ़ - , 59. ङ - ,

XIII. पद्य पूरा करो (Complete the first 4 lines of the poem)

(4)

60. कितनी सुंदर
.....
.....
..... आते हो तब।

XIV. उत्तर लिखो (Answer the following)

61. अकबर ने दरबार में क्या पूछा? (1½)

62. साक्षी ने किस-किसको आवाज़ लगाई? (1½)

63. मोर कब नाच दिखाता है? (2)

64. कोयल चिड़ियों की रानी क्यों कहलाती है? (2)

65. सबने सूरज से क्या कहा? (2)

66. स्त्रीलिंग किसे कहते हैं? दो उदाहरण भी लिखिए? (2½)